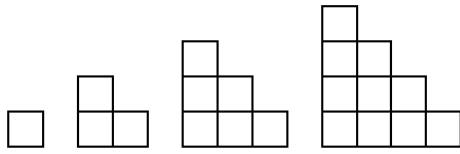


Algebra 1: 4.1 Homework
Patterns

Name _____ Period _____

Draw the next figure in each pattern. Describe the pattern. Then, write the number sequence for the first FIVE figures in the pattern.

1.



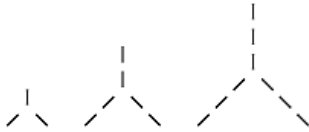
Next figure:

Sequence:

1, 3, 6, _____, _____

Pattern: _____

2.



Next figure:

Sequence:

_____, _____, _____, _____, _____

Pattern: _____

3.



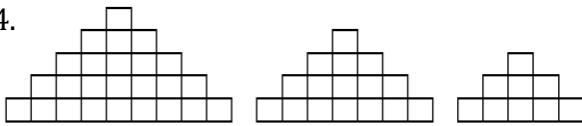
Next figure:

Sequence:

_____, _____, _____, _____, _____

Pattern: _____

4.



Next figure:

Sequence:

_____, _____, _____, _____, _____

Pattern: _____

5.



Next figure:

Sequence:

_____, _____, _____, _____, _____

Pattern: _____