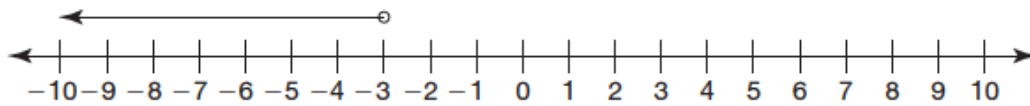


## Warm Up

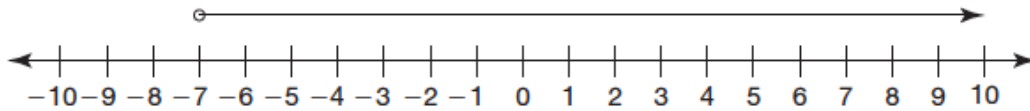
---

Explain the error(s) in each graph.

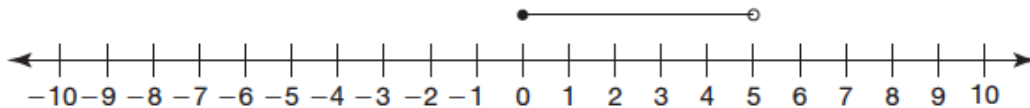
1.  $x \leq -3$



2.  $x \geq -7$



3.  $0 \leq x < 3$



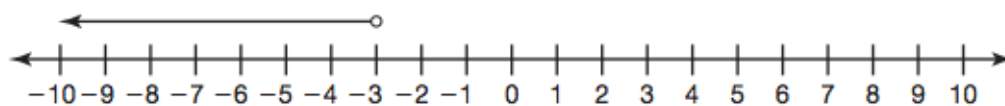
## ANSWER KEY

### Warm Up

---

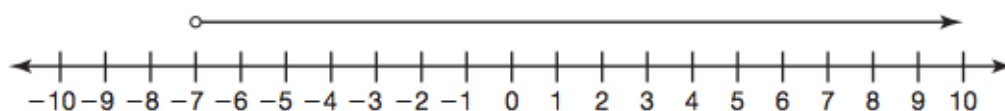
Explain the error(s) in each graph.

1.  $x \leq -3$



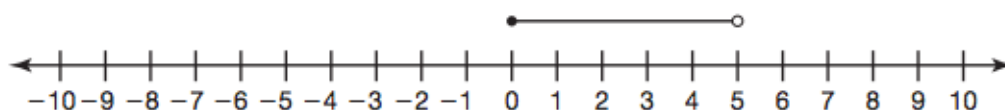
The circle should be closed.

2.  $x \geq -7$



The circle should be closed.

3.  $0 \leq x < 3$



The open circle on the right should be above 3.